


# Number Sense Workout




Show with ten-frames


My number has  
 \_\_\_\_\_ hundreds \_\_\_\_\_ tens  
 and \_\_\_\_\_ ones

Write in expanded form:

\_\_\_\_\_



Write 4 different combinations for your number:

\_\_\_\_\_

\_\_\_\_\_


\_\_\_\_\_

Write a number greater than your number:


\_\_\_\_\_

Write a number less than your number:

\_\_\_\_\_



# Number Sense Workout




Show with ten-frames


My number has  
 \_\_\_\_\_ hundreds \_\_\_\_\_ tens  
 and \_\_\_\_\_ ones

Write in expanded form:

\_\_\_\_\_



Write 4 different combinations for your number:

\_\_\_\_\_

\_\_\_\_\_

\_\_\_\_\_

Write a number greater than your number:

\_\_\_\_\_

Write a number less than your number:

\_\_\_\_\_